



Year 6 Homework

Term 1 ~ Week 7



EVERYDAY ACTIVITIES:

Look, Say, Cover, Write, Check with your spelling words


Read for at least 20min every night

Practice your times tables



Remember the importance of how you present your work. Here is our St Cecilia's policy on how to set out your work.

- Rule a margin in
- Full date
- Subheading for all your set tasks so it is clear which homework task you are completing.



Week 7 Spelling List

Class Focus- words containing "ll" and :rr"	Extension Words
1. parallel	11. censor
2. actually	12. sensor
3. alley	13. censor
4. ballet	14. allowed
5. footballer	15. aloud
6. hurricane	
7. barrel	
8. cherries	
9. deterrence	
10. horrid	

Remember:

Monday - Faction Swimming Carnival

Thursday - Y6 Reconciliation

Friday- HW Due

ACTIVITIES: WEEK 7

Task 1:

Write out your spelling words every night. Look, Say, Cover, Write, Check every night. Ensure you write each word neatly and accurately.

Task 2:

Create a crossword using at least 10 of your spelling and extension words. Each answer must have a clue that relates to that word.

Task 3:

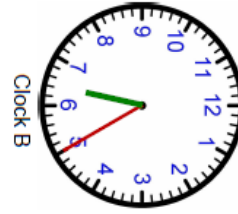
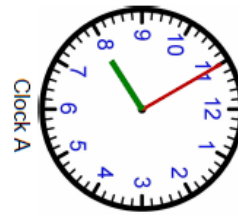
Finishing class work

Novel Study: Ensure that all tasks up to the end of Chapter 5 in your novel study are complete. This includes your title page, summaries, chapter questions and word bank.

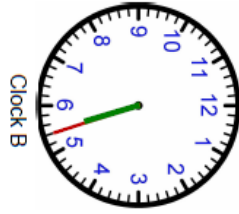
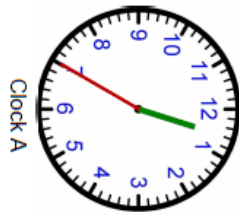
NUMERACY ACTIVITIES- Elapsed Time

Please cut out and glue into your Homework Book

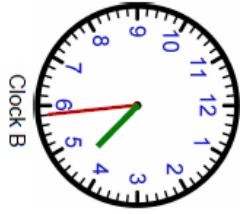
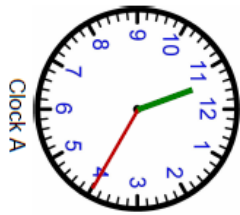
Name : _____
 Teacher : _____
 Date : _____
 Score : _____



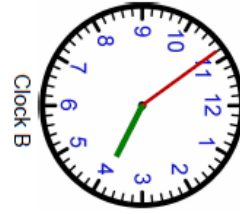
What time is on Clock A ? _____
 What time is on Clock B ? _____
 How much time has elapsed between Clock A and B ? _____



What time is on Clock A ? _____
 What time is on Clock B ? _____
 How much time has elapsed between Clock A and B ? _____



What time is on Clock A ? _____
 What time is on Clock B ? _____
 How much time has elapsed between Clock A and B ? _____



What time is on Clock A ? _____
 What time is on Clock B ? _____
 How much time has elapsed between Clock A and B ? _____

© 2011

Write out or stick into your homework book.

$$\begin{array}{r} 108 \\ \times 87 \\ \hline \end{array}$$

$$\begin{array}{r} 234 \\ \times 56 \\ \hline \end{array}$$

$$\begin{array}{r} 180 \\ \times 72 \\ \hline \end{array}$$

$$\begin{array}{r} 818 \\ \times 23 \\ \hline \end{array}$$

$$\begin{array}{r} 973 \\ \times 15 \\ \hline \end{array}$$

$$\begin{array}{r} 355 \\ \times 40 \\ \hline \end{array}$$

$$\begin{array}{r} 705 \\ \times 156 \\ \hline \end{array}$$

$$\begin{array}{r} 183 \\ \times 515 \\ \hline \end{array}$$

$$\begin{array}{r} 625 \\ \times 208 \\ \hline \end{array}$$

$$\begin{array}{r} 276 \\ \times 150 \\ \hline \end{array}$$

$$\begin{array}{r} 858 \\ \times 931 \\ \hline \end{array}$$

$$\begin{array}{r} 957 \\ \times 393 \\ \hline \end{array}$$

$$\begin{array}{r} 547 \\ \times 404 \\ \hline \end{array}$$

$$\begin{array}{r} 719 \\ \times 628 \\ \hline \end{array}$$

$$\begin{array}{r} 919 \\ \times 800 \\ \hline \end{array}$$

$$\begin{array}{r} 510 \\ \times 964 \\ \hline \end{array}$$